

Lesson 141

1. If 274 people attended the baseball game and 56 people won free T-shirts, how many people at the game did not win T-shirts?

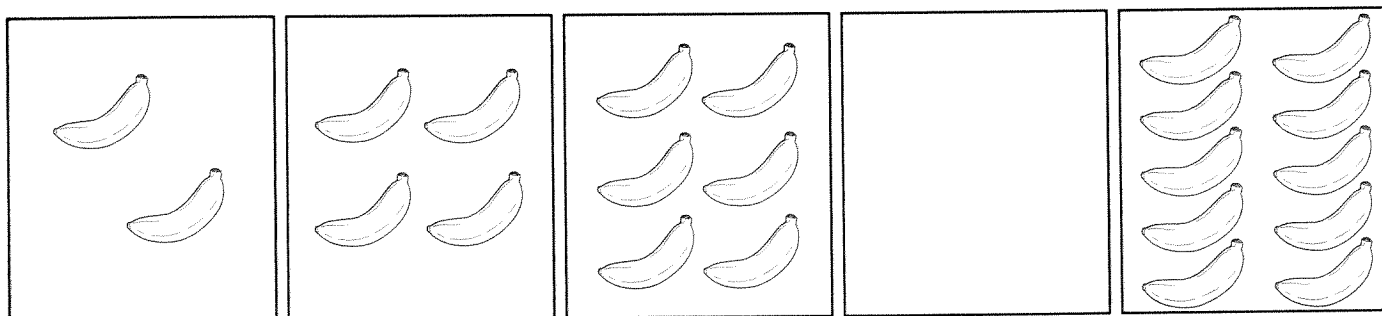
_____ people at the game did not win T-shirts.

2. Estimate to the nearest hundred. $359 + 662$ is about _____.

3. $314 + 18 =$

4. $142 + 89 =$

5. Draw the missing bananas to complete the pattern.

**Lesson 142**

1. $700 - 200 =$

2. $333 - 111 =$

3. $19 + 5 =$

4. There are 24 students in Room 2-L. Out of those 24, 15 of the students are wearing jeans. How many of the students are not wearing jeans?

_____ of the students are not wearing jeans.

5. Write the missing number to complete the pattern.

900, 700, 500, _____, 100

Lesson 143

1. A total of 159 children entered a coloring contest. If 15 children won a ribbon, how many children did not win a ribbon?

_____ children did not win a ribbon.

2. $214 - 5 =$

3. Estimate to the nearest ten.

$117 + 113$ is about _____.

4. $111 + 145 =$

5. Draw an X on all the odd numbers.

54 65 43 21 19 71 49 50

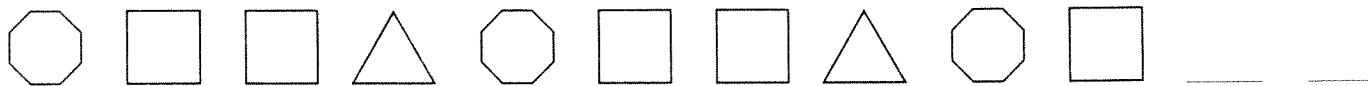
Lesson 144

1. Fill in the blank with $>$, $<$, or $=$ to make the number sentence true.

278 _____ 317

2. $19 + 84 =$

3. Draw the missing shapes to complete the pattern.



4. $14 + 26 =$

5. Ben has 120 flash cards. If 11 flash cards show subtraction facts and the rest of the flash cards show addition facts, how many flash cards show addition facts?

_____ flash cards show addition facts.

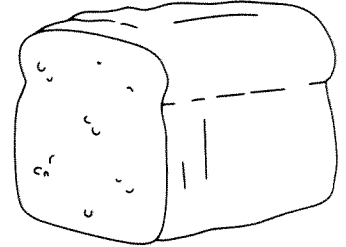
Lesson 145

1. Estimate to the nearest ten.

$545 + 129$ is about _____.

2. Allison bakes 14 loaves of bread. She gives away 8 loaves of bread. How many loaves of bread does Allison have left?

Allison has _____ loaves of bread left.



3. $55 - 5 =$

4. $13 - 7 =$

5. Fill in the blank with $>$, $<$, or $=$ to make the number sentence true.

55 _____ 55

Lesson 146

1. Estimate to the nearest ten.

$56 + 33$ is about _____.

2. $14 - 7 =$

3. $683 + 12 =$

4. Ollie has 98 coins in his bank. He gives away 17 coins. How many coins does he have left?

Ollie has _____ coins left.

5. Write the missing numbers to complete the pattern.

17, 15, 13, 11, _____, 7, _____

Lesson 147

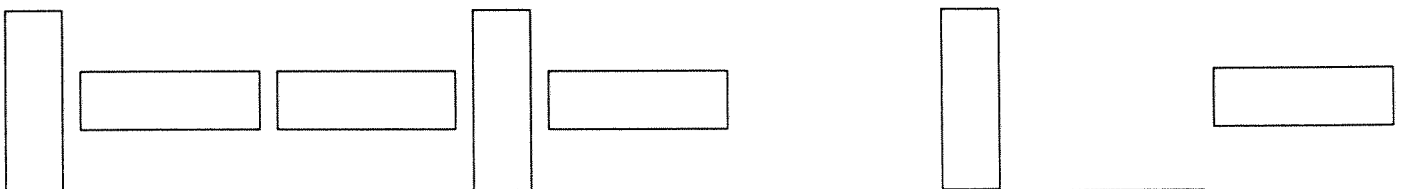
- $16 - 3 =$
- Estimate to the nearest hundred.
 $444 + 313$ is about _____.
- $78 + 59 =$
- Write the missing numbers to complete the pattern.
 $350, 300, 250, \underline{\hspace{1cm}}, 150, \underline{\hspace{1cm}}$
- Sabena scored 12 points during her Monday night basketball game. On Tuesday night, she scored an additional 22 points. How many points did Sabena score in all?

Sabena scored _____ points in all.

Lesson 148

- Brianna has 81 green beads, 71 red beads, and 77 purple beads on her necklace. How many purple and green beads are on Brianna's necklace?

_____ purple and green beads are on Brianna's necklace.
- $15 - 9 =$
- $333 - 4 =$
- $215 + 251 =$
- Draw the missing rectangles to complete the pattern.



Lesson 149

- Estimate to the nearest hundred.
433 + 226 is about _____.
- $16 + 9 =$
- $16 - 9 =$
- Write the missing letter to complete the pattern.
F, G, H, J, K, L, N, _____, P, R
- There are 55 spices on a shelf. A chef uses 17 spices in a secret recipe.
How many spices does the chef not use?
The chef does not use _____ spices.

Lesson 150

- There are 15 kids waiting in line. Andre is 8th in line. How many kids are behind Andre in line?
_____ kids are behind Andre in line.
- $27 - 18 =$
- $600 - 200 =$
- $88 + 88 =$
- Draw the missing object to complete the pattern.

